

LESSON
18


CLASSWORK

Life on the Edge

Valence and Core Electrons

Name _____

Date _____ Period _____



Purpose

To discover the arrangements of electrons within atoms.

Instructions

Complete the table on the handout, filling in the missing atoms. Then answer the questions.

1. How does the number of electrons change as you move from left to right across a period?
2. What do all the atoms of Group 1A elements have in common?
3. List three things that all the atoms of the elements in period 3 have in common.
4. Which atoms have two electrons in the first shell and eight electrons in the second shell?
5. What happens to the electron count and the number of shells when you move from neon, Ne, to sodium, Na?
6. How many shells of electrons does rubidium, Rb, have? How many electrons are in the outermost shell? Draw a shell model of a rubidium atom.
7. Draw a shell model of an atom with two shells and six electrons. What element is this? How many electrons are in the outermost shell?
8. Draw a shell model of an atom with three shells and two electrons in the outermost shell. How many total electrons does this atom have? What element is this?


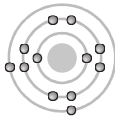

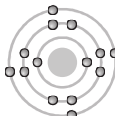





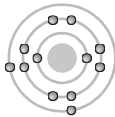

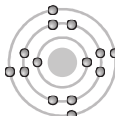




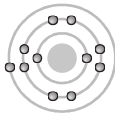

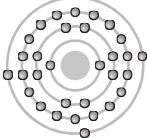
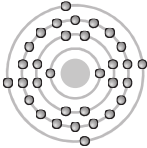
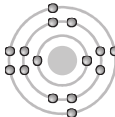
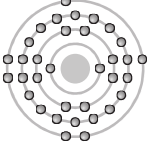
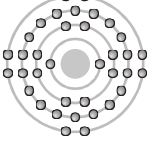
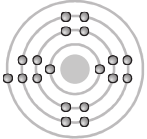
9. Look at the periodic table and the handout The Shell Model. Explain why the number of electrons in the third shell suddenly changes from 8 to 18 between the element calcium, Ca, and the element gallium, Ga.

10. Summarize at least three patterns you discovered during this lesson.

11. **Making Sense** Explain how you can determine the arrangement of an element's electrons from the element's position in the periodic table.

12. **If You Finish Early** Predict the electron arrangement of tin, Sn. Draw a shell model of it. Explain your reasoning.

TABLE OF ELECTRON SHELLS

Group 1A		Group 2A						Group 3A						Group 4A						Group 5A						Group 6A						Group 7A						Group 8A					
 Hydrogen, H		 Beryllium, Be						 Boron, B						 Carbon, C						 Nitrogen, N						 Oxygen, O						 Fluorine, F						 Helium, He					
 Lithium, Li		 Magnesium, Mg						 Aluminum, Al						 Silicon, Si						 Phosphorus, P						 Sulfur, S						 Chlorine, Cl						 Neon, Ne					
 Sodium, Na		 Calcium, Ca						 Gallium, Ga						 Germanium, Ge						 Arsenic, As						 Selenium, Se						 Krypton, Kr											
 Potassium, K																																											